

# Winkelarten bestimmen Übungsblatt

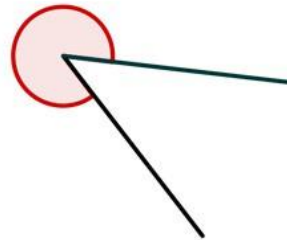


Lösung: ©www.mein-lernen.at

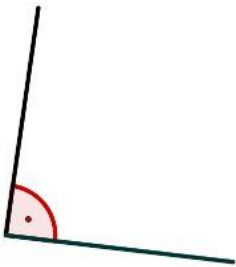
Ordne folgende Winkel richtig zu:



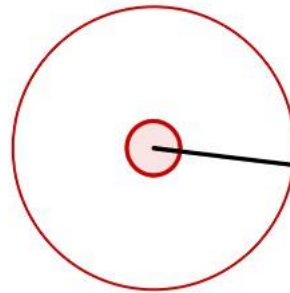
---



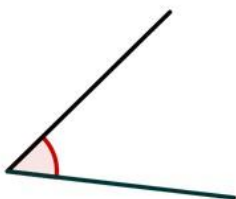
---



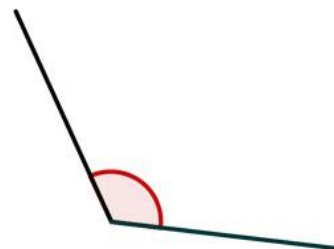
---



---



---



---